

Worksheet 1

Geography

AGRICULTURE

1. Define the following terms:

- a. Agriculture _____
- b. horticulture _____
- c. planation Agriculture _____
- d. shifting agriculture _____

2. Complete the following table:

	Rice	Wheat
Temperature		
Rainfall		
soil		
Leading Producers		

3. Give a single term for the following

- a. Specializedcultivation of fruits, vegetables and flowers. _____
- b. Cultivation of crops and rearing of livestock on the same piece of land. _____
- c. Rearing of silkworms to produce raw silk. _____
- d. Breeding and rearing of fish in lakes and ponds. _____
- e. The land on which crops are grown. _____

4. Identify the following on the world Map.

- a. Leading producer of rice
- b. Leading producer of Tea
- c. Leading Producer of coffee
- d a jute producing country
- e. a cotton producing country.

Worksheet 2

Geography

Industries

1. Name the following

- a. Industries processing mineral raw materials. _____
- b. Industries use products from seas and oceans. _____
- c. Industries utilize forest produce as raw materials. _____
- d. Industries employing large number of people, large capital investment to produce goods on large scale. _____
- e. Industries owned and operated by the producers or suppliers of raw materials _____.

2. Match the following

A	B
1. Steel Authority of India	Joint sector
2. Anand Milk Union Ltd	Private Sector
3. Tata Iron and steel company	Cooperative Sector
4. Maruti Udyog Ltd	Public sector

3. Fill in the blanks.

1. 'Manchester of India' is-----
2. _____ is the 'Manchester of Japan'.
3. _____ is called 'Information capital of India'.
4. _____ is the only private sector Iron and Steel plant in India.
5. _____ is called 'Basic or Key industry'.
6. _____ is called the 'silicon Valley'.

WORKSHEET-3 GEOGRAPHY

HUMAN RECOURCES

1. Give a single term for the following

1. Number of people living in unit are, _____
2. Number of females per thousand males. _____
3. Division of the total population under different age groups.
4. A graphical representation of the age , sex composition of the population. _____
5. Movement of people from one place to another _____

DIFFERENTIATE BETWEEN THE FOLLOWING

- a. Birth Rate and death rate

- b. Immigration and emigration _____

- c. Internal migration and International migration _____

- d. Dependent population and working population. _____

2. Write True or False

1. Many more people live to the south of the Equator than the north
2. Each of the top ten populated countries have a population over 100 million .
3. South Central Asia has the highest density of population.
4. The population of the world doubled between 1820 and 1999.
5. In the United Kingdom, the birth rate as well as the death rate is low.
6. Japan and Bangladesh are very densely populated. We can conclude that both are economically underdeveloped.

3. Match the following

Column I Column II

- | | |
|---------------------------|-------------------|
| a. Fertile plains | The Sahara Desert |
| b. Very hot climate | south Africa |
| c. Extremely cold climate | Jerusalem |
| d. Cultural significance | Antarctica |
| e. Diamond mines | The Middle East |
| f. Oil | Hwang-He in China |

WORKSHEET- 1

CHAPTER 7

HISTORY

Weavers, Iron smelters and Factory Owners

1.Fill in the blanks

1. _____ came to be known as the “Workshop of the world”.
2. _____ was woven in Surat, Ahmedabad and Patan.
3. CentersforJamdani weaving were _____ in Bengal and _____ in United Provinces.
4. _____ was the biggest steel industry with the British empire,
5. _____ had one of the finest ores in the world.

2.Match the following

1. Cochin Port of Gujarat
2. Steam Engine mulmul
- 3.Aurang Richard Arkwright
4. SuratDutch Settlement
5. Dacca Persian term for a warehouse

3.Write True or False

- 1.Kaikollar and Devangs were weavers of south India.
- 2.TISCO supplied rails to the Indian railways.
- 3.Bandanna is referred to any brightly colouredand printed scarf for the neck or head.
- 4.Khadi became a symbol of nationalism.
- 5.Spining Jenny, a machine by which a single worker could operate several spindles.

4. Define the term

a. Chintz _____

b. Bandanna _____

c.
Spinning Jenny _____

d.
Charkha _____

e.
Rangrez _____

f.
Aurang _____

g.
Bellows _____

h. Slagheaps _____

WORKSHEET -2

HISTORY

CIVILISING THE 'NATIVE EDUCATING THE NATION'

1. Define the term

Linguist _____

Native _____

Orientalists _____

Munshi _____

Vernacular _____

Pathshala _____

2. Write True or False

1. Thomas Colebrook started a journal called Asiatic Researches.
2. Lord Macaulay saw India as an uncivilized country that needed to be civilized.
3. After 1854 the company to improve the system of vernacular education.
4. Gandhi and Tagore favored western education.
5. By mid-nineteenth century school for girls were set up by Christian missionaries.

3. Match the following

1. Madrasa President of Board of control
2. Pathshala local language of dialect
3. William Adam children of peasant families studied
4. Charles Wood Arabic place for learning
5. Vernacular Scottish missionary

4. Write about a few lines about following personalities

James Mill

Thomas

Macaulay

William Jones

Henry Thomas Colebrook

5. Essay Writing


Are you favor of English Education? Write your opinion.

Worksheet-3



History

WOMEN , CASTE AND REFORM

1. Stick pictures of any four social reformers who worked towards the upliftment of the Indian people, highlighting the area they worked in







2. Match the following

1. Ghasi Das - Self Respect Movemnt
2. JyotiraoPhuleMahar
3. Periyar -Chennai
4. Veda Samaj - Satnami Movement
5. Ambedkar- 1857

3. Define the term

Sati _____

Untouchable _____

Suffrage _____

4. Write the Importance of the following years

a. 1829 _____

b. 1857 _____

c. 1927- _____

1935 _____

d. 1856 _____

3. What social ideas did the following people support

a. Rajarammohan Roy _____

b. Dayanand Saraswati _____

c. Veerasalingam Pantulu _____

d. Jyotirao Phule _____

e. Pandita Rambai _____

f. Periyar _____

g. Mumtaz Ali _____

h. Ishwarchandra _____

Vidhyasagar _____

Source Based Question

In 1927, Ambedkar said:

“We now want to go to the Tank only to prove that like others, we are also human being s.... Hindu society should be reorganized on two main principles- equality and absence of casteism.”

1. who was Ambedkar?

2. On what basis did he wish Hindu society to be reorganized?

Worksheet 4

History

The changing world of Visual Arts

1. Match the following

1. Johann Zoffany- Life study
2. Raja Ravi Varma-Patuas
3. Study of human forms convention
4. Accepted norm or style German
5. Scroll painters Travancore

2. Answer the following

1. Define terms Portrait and Portraiture

2. Write a short note on Johann Zoffany.

3. Explain briefly the term 'history painting'.

4. What do you understand by "Company paintings"?

5. What is typical Gothic style? Give an example.

WORKSHEET 5

History

The Making of National Movement(1870s-1947)

1.FILL IN THE BLANKS

1. _____, A Marathi newspaper was edited byThilak.
2. In_____, Gujarat peasant organized campaigns against the high land revenue.
3. _____was the first Indian woman to become President of the Indian National congress in 1925.
4. _____ was the first Governor General of free India.
5. ChittaRanjan Das a lawyer from East Bengal was active in the _____ movement.

2.On the political map of India marks and label.

1. A place where innocent people were massacred.
2. A place where INC was founded.
3. A place where the congress and the League joined hands.
4. A place where the Hindustan socialist Republican Association was formed.
5. A place where the Muslim league was formed.

3.Write the importance of the following years

1878 _____

1885 _____

1905 _____

1920 _____

1929 _____

1930 _____

1942 _____

1947 _____

Worksheet 6

History

India after Independence

1. Write true or false.

1. PottiSriramulu demanded the formation of Andhra State.
2. India and Pakistan were created on the basis of religion.
3. The Gandhi Sager Dam is built on the Chambal river in Maharashtra.
4. Non-alignment formed the basis of India's foreign policy.
5. Dr. Rajendra Prasad was the chairman of the Drafting committee.

2. Match the following

Mahatma Gandhi Lawyer, economist

Dharavi Dalits

Br. Ambedkar Chhattisgarh

Bhilai Steel Plant Nathuram Godse

Untouchables Mumbai

3. Answer the following questions

1. What were the problems faced by independent India in 1947.
2. Explain the term Universal Adult Franchise.
3. Explain 'Equality before law'.
4. When and why was the Planning Commission set up.?
5. What were the three lists provided by the constitution?